






Mathematics

Class Four (4)

| Topic | Description | Resources and Exercises |
|-----------------|--|--|
| TABLES & SHARES | <p>Assess yourself by attempting the questions in the attached document under exercises. After completing your assignment, email it to the address provided.</p> <p>stmarysgrade4maths@gmail.com</p> | <p>Shyama's Garden:</p>   <p>1. What are the ways in which the sunflower and marigold are planted?</p> <p>18 = _____ × _____ So there is _____ row with _____ plants.</p> <p>18 = _____ × _____ So there are _____ rows with _____ plants each.</p> <p>2. Jars in the Shelf</p> <p>Bheema made a shelf for 30 jars. This is a long shelf with two rows. Each row has the same number of jars.</p>  <ul style="list-style-type: none">• Can you think of other ways to make a shelf to keep 30 jars? Draw and show.• Draw a shelf. Show how many jars you will keep in each row. How many rows are there? |